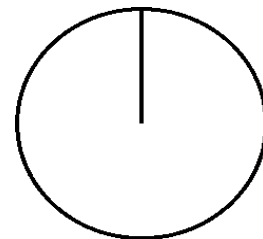


Pizza-regning (60)

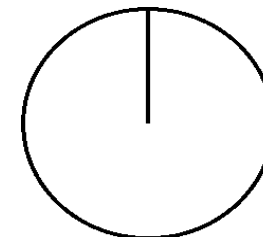
Omregn fra brøk til procent (med 1 decimal) og fra brøk til grader (hele tal).

Tegn derefter procentcirklen

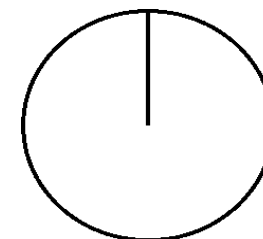
$$\frac{126}{360} = \frac{\quad}{\quad} = \quad \% = \frac{\quad}{\quad} = \quad =$$



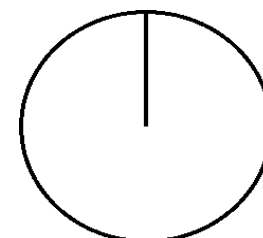
$$\frac{144}{360} = \frac{\quad}{\quad} = \quad \% = \frac{\quad}{\quad} = \quad =$$



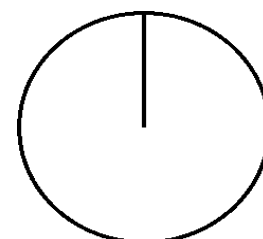
$$\frac{180}{360} = \frac{\quad}{\quad} = \quad \% = \frac{\quad}{\quad} = \quad =$$



$$\frac{72}{360} = \frac{\quad}{\quad} = \quad \% = \frac{\quad}{\quad} = \quad =$$



$$\frac{72}{180} = \frac{\quad}{\quad} = \quad \% = \frac{\quad}{\quad} = \quad =$$



$$\frac{25}{90} = \frac{\quad}{\quad} = \quad \% = \frac{\quad}{\quad} = \quad =$$

