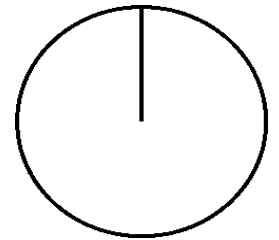


Pizza-regning (59)

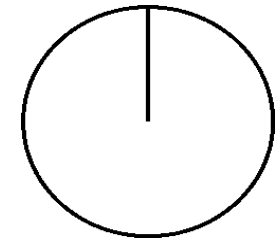
Omregn fra brøk til procent (med 1 decimal) og fra brøk til grader (hele tal).

Tegn derefter procentcirklen

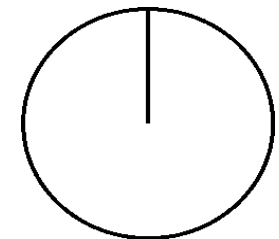
$$\frac{105}{126} = \frac{\quad}{\quad} = \quad \% = \frac{\quad}{\quad} = \quad =$$



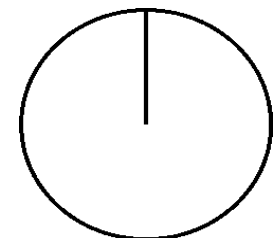
$$\frac{51}{68} = \frac{\quad}{\quad} = \quad \% = \frac{\quad}{\quad} = \quad =$$



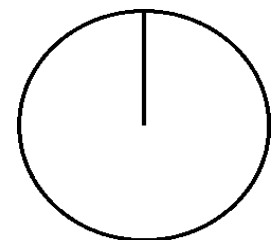
$$\frac{18}{108} = \frac{\quad}{\quad} = \quad \% = \frac{\quad}{\quad} = \quad =$$



$$\frac{120}{135} = \frac{\quad}{\quad} = \quad \% = \frac{\quad}{\quad} = \quad =$$



$$\frac{84}{120} = \frac{\quad}{\quad} = \quad \% = \frac{\quad}{\quad} = \quad =$$



$$\frac{95}{114} = \frac{\quad}{\quad} = \quad \% = \frac{\quad}{\quad} = \quad =$$

