

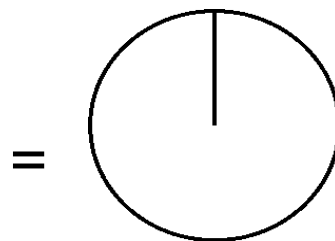
Pizza-regning (45)

Omregn fra brøk til procent (med 1 decimal) og fra brøk til grader (hele tal).

Tegn derefter procentcirklen

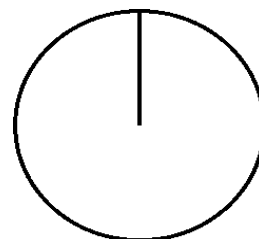
$$\frac{2}{6} = \frac{2 \cdot 100}{6} =$$

$$\% = \frac{2 \cdot 360}{6} =$$



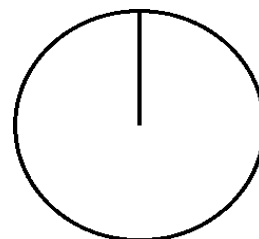
$$\frac{4}{5} = \frac{\cdot 100}{5} =$$

$$\% = \frac{\cdot 360}{5} =$$



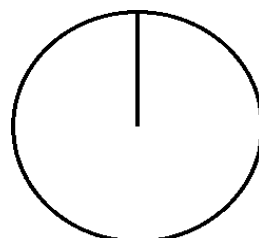
$$\frac{2}{7} = \frac{\cdot 100}{7} =$$

$$\% = \frac{\cdot 360}{7} =$$



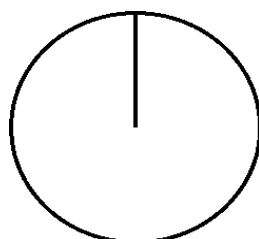
$$\frac{1}{8} = \frac{\cdot 100}{8} =$$

$$\% = \frac{\cdot 360}{8} =$$



$$\frac{2}{9} = \frac{\cdot 100}{9} =$$

$$\% = \frac{\cdot 360}{9} =$$



$$\frac{2}{5} = \frac{\cdot 100}{5} =$$

$$\% = \frac{\cdot 360}{5} =$$

