

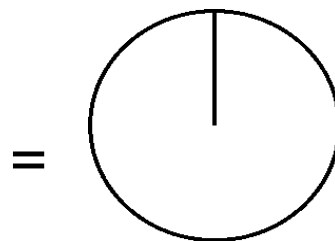
Pizza-regning (44)

Omregn fra brøk til procent (med 1 decimal) og fra brøk til grader (hele tal).

Tegn derefter procentcirklen

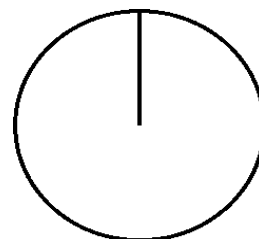
$$\frac{3}{5} = \frac{3 \cdot 100}{5} =$$

$$\% = \frac{3 \cdot 360}{5} =$$



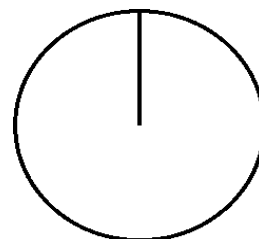
$$\frac{1}{4} = \frac{\cdot 100}{4} =$$

$$\% = \frac{\cdot 360}{4} =$$



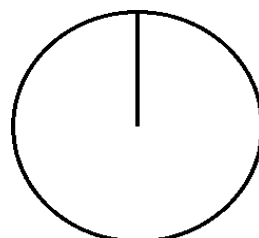
$$\frac{4}{6} = \frac{\cdot 100}{6} =$$

$$\% = \frac{\cdot 360}{6} =$$



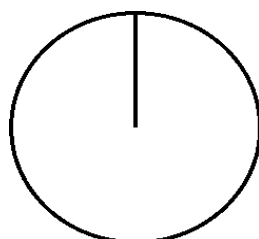
$$\frac{3}{4} = \frac{\cdot 100}{4} =$$

$$\% = \frac{\cdot 360}{4} =$$



$$\frac{2}{3} = \frac{\cdot 100}{3} =$$

$$\% = \frac{\cdot 360}{3} =$$



$$\frac{5}{5} = \frac{\cdot 100}{5} =$$

$$\% = \frac{\cdot 360}{5} =$$

