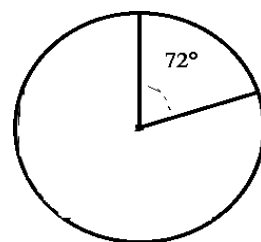


# Pizza-regning (43)

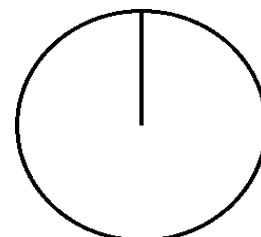
Omregn fra brøk til procent (med 1 decimal) og fra brøk til grader (hele tal).

Tegn derefter procentcirklen

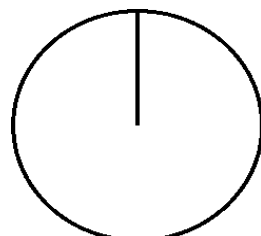
$$\frac{1}{5} = \frac{1 \cdot 100}{5} = 20 \% = \frac{1 \cdot 360}{5} = 72^\circ =$$



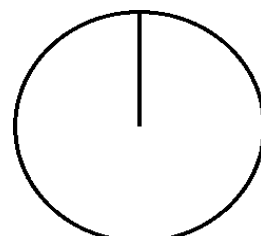
$$\frac{1}{7} = \frac{1 \cdot 100}{7} = \quad \% = \frac{1 \cdot 360}{7} = \quad =$$



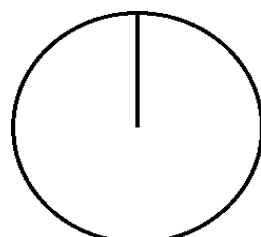
$$\frac{1}{6} = \frac{\quad \cdot 100}{6} = \quad \% = \frac{\quad \cdot 360}{6} = \quad =$$



$$\frac{1}{3} = \frac{\quad \cdot 100}{3} = \quad \% = \frac{\quad \cdot 360}{3} = \quad =$$



$$\frac{2}{3} = \frac{\quad \cdot 100}{3} = \quad \% = \frac{\quad \cdot 360}{3} = \quad =$$



$$\frac{2}{5} = \frac{\quad \cdot 100}{5} = \quad \% = \frac{\quad \cdot 360}{5} = \quad =$$

