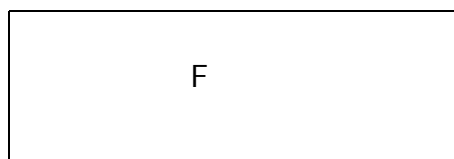

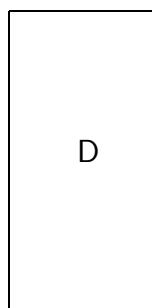





Beregn areal og omkreds af rektangler (1)

Mål figuren og beregn areal og omkreds



	A	B	C	D	E	F
Grundlinje						
Højde						
Areal i cm^2						
Omkreds i cm						